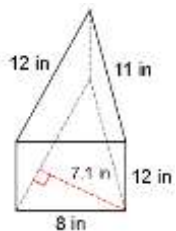


What do you say when you see an empty parrot cage?

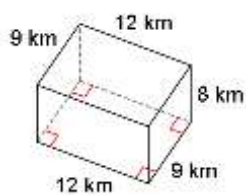
1 2 3 4 5 6 7

Find the volume of each shape below:

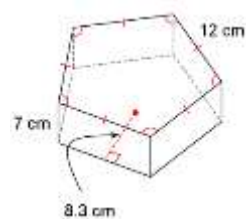
1.



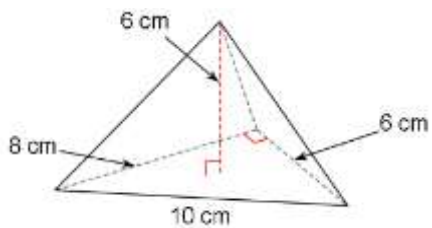
2.



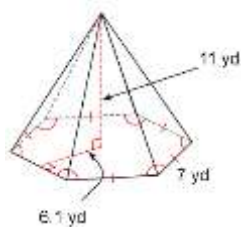
3.



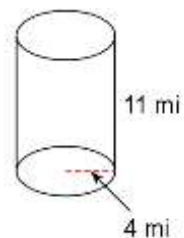
4.



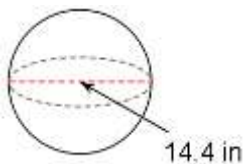
5.



6.



7.



Answer key:

- | | |
|------------|-------------|
| 864 - O | 469.7 - G |
| 45- A | 1563.46 - N |
| 1704 - E | 231.4 - W |
| 552.92 - O | 1743 - L |
| 445.3 - B | 56 - P |
| 511.2 - P | 500.8 - A |
| 226.1 - V | 48 - Y |